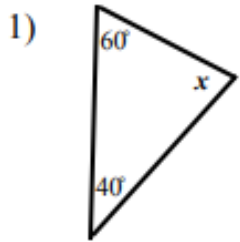
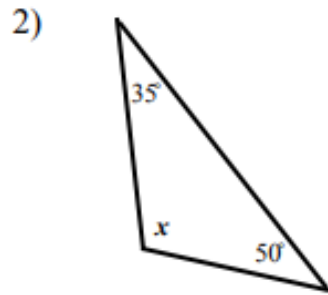


אוריגאמטריה סכום הזוויות במשולש | חלק כיתה ה

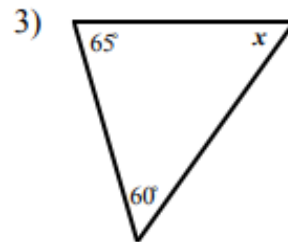
משימת סיכום: השלמו את הזוויות החסרות בכל משולש.



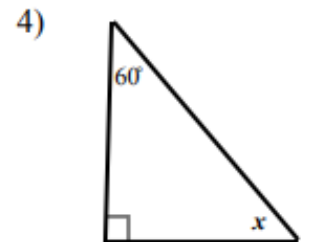
x =



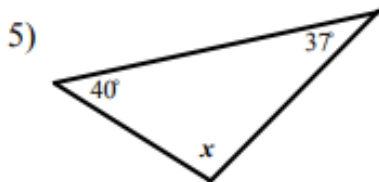
x =



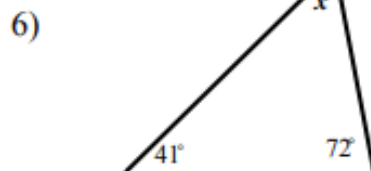
x =



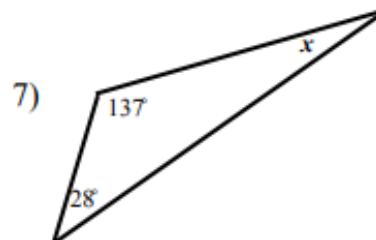
x =



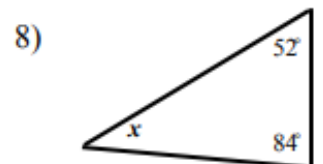
x =



x =



x =



x =